



Practice 3 Making Number Patterns

What comes next in each pattern?

Write the number.








What is 1 more?
Write the number.









What is 1 less?
Write the number.


7.



8.




9.



Write the missing numbers in the number patterns.

10.

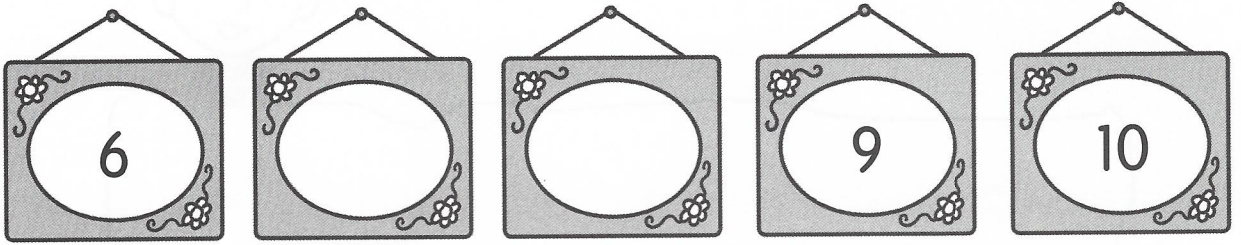


11.

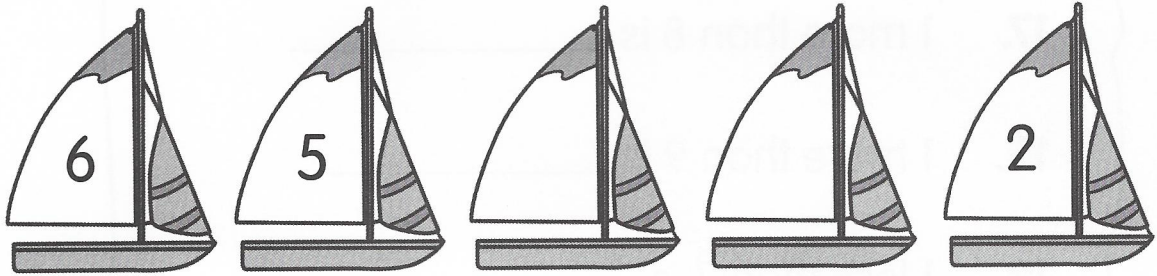


Write the missing numbers in the number patterns.


12.




13.




14.



15.



Fill in the blanks.



16. 1 more than 1 is _____.

17. 1 more than 8 is _____.

18. 1 more than 9 is _____.

19. 1 less than 7 is _____.

20. 1 less than 9 is _____.


21. 1 less than 6 is _____.

22. _____ is 1 more than 3.


23. _____ is 1 more than 6.

24. _____ is 1 less than 4.

25. _____ is 1 less than 7.




Put On Your Thinking Cap!




Challenging Practice

Mother Hen's eggs have numbers that are greater than 2 and less than 8.


Color the eggs that belong to Mother Hen.




© 2009 Marshall Cavendish International (Singapore) Private Limited




Put On Your Thinking Cap!



Problem Solving



Daryl sees a pattern made with .

He wants to continue the pattern but does not know how many  to draw.


Draw the next group of  in the box below to continue the pattern.

There are _____  in the next group.

Chapter Review/Test

Vocabulary

Match.

1. four ● 10
2. seven ● 4
3. ten ● 7
4. zero ● 0
- 

Concepts and Skills


Circle the stars to show the number.

Write the number in words.


5. 5 ★ ★ ★ ★ ★ ★ ★ ★ ★ ★

6. 9 ★ ★ ★ ★ ★ ★ ★ ★ ★ ★

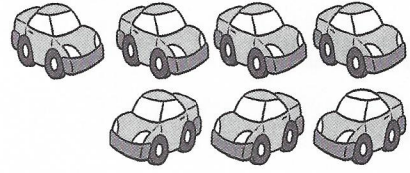
Fill in the blanks with *greater than*, *less than* or *the same as*.



cups and saucers



trees



cars

7. The number of cups is _____ the number of saucers.
8. The number of trees is _____ the number of cars.
9. The number of cars is _____ the number of cups.

Write any two numbers.

10. greater than 5: _____
11. less than 7: _____

Write the missing numbers in the number pattern.

12. 6 5 4 1

Fill in the blanks.

13. 4 is 1 less than _____.
14. 9 is 1 more than _____.